
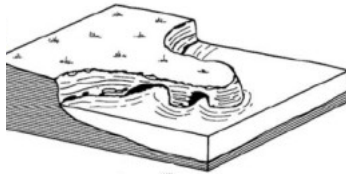




Name _____ Date _____ Block _____


Put the pictures in correct order (1-5), label each one with what has formed (sea stack, sea cave, sea stumps, sea cliff, or sea caves)



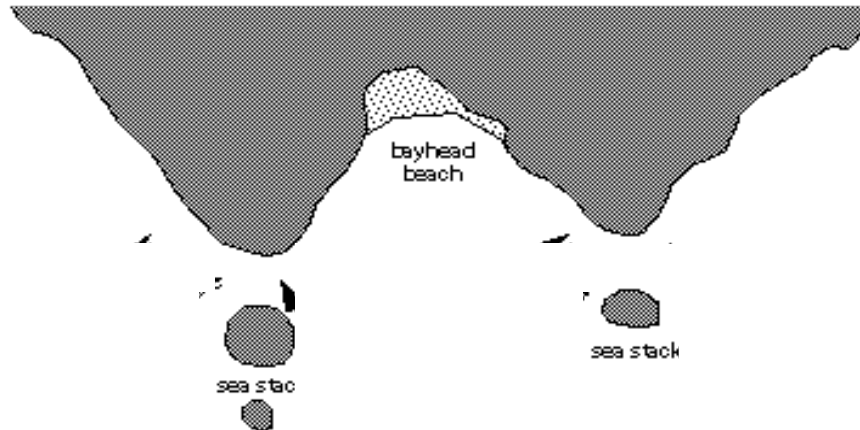








Show how the waves would refract as they come ashore. Assume the waves are coming directly towards shore.



Picture Walk Around: (Sea Stack, Sea stump, Wave cut platform, Sea arch, Wave cut notch)

1. _____ and _____
2. _____
3. _____ (High Tide OR Low Tide) because
4. _____
5. _____
6. _____ (High Tide OR Low Tide) because
7. _____ and _____
8. Greatest _____, _____ because _____
Least _____. _____ because _____
9. _____

10. Show how this cliff might evolve over time, try to show wave cut platforms, sea arches, stacks, etc.

